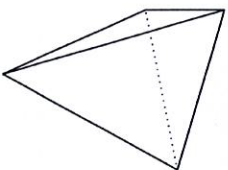



10




**WHAT FIGURE RESULTS
FROM SLICING THIS FIGURE
PARALLEL TO ITS BASE?**

13




**WHAT FIGURE RESULTS
FROM SLICING THIS FIGURE
PARALLEL TO ITS BASE?**

16



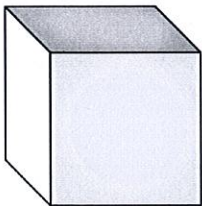
**WHAT FIGURE RESULTS
FROM SLICING THIS FIGURE
PARALLEL TO ITS BASE?**

11



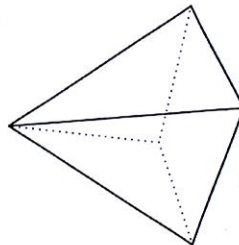
**WHAT FIGURE RESULTS
FROM SLICING THIS FIGURE
PARALLEL TO ITS BASE?**

14




**WHAT FIGURE RESULTS
FROM SLICING THIS FIGURE
PARALLEL TO ITS BASE?**

17



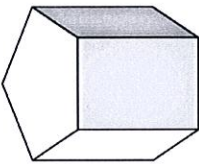
**WHAT FIGURE RESULTS
FROM SLICING THIS FIGURE
PARALLEL TO ITS BASE?**

12



**WHAT FIGURE RESULTS
FROM SLICING THIS FIGURE
PARALLEL TO ITS BASE?**

15



**WHAT FIGURE RESULTS
FROM SLICING THIS FIGURE
PARALLEL TO ITS BASE?**

18



**WHAT FIGURE RESULTS
FROM SLICING THIS FIGURE
PARALLEL TO ITS BASE?**